
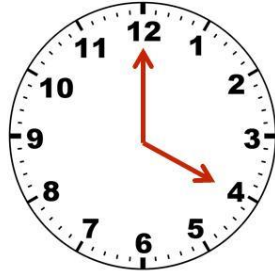


# Day 43



What is the difference between the times shown on these clocks?



20 minutes



3 hours



40 minutes



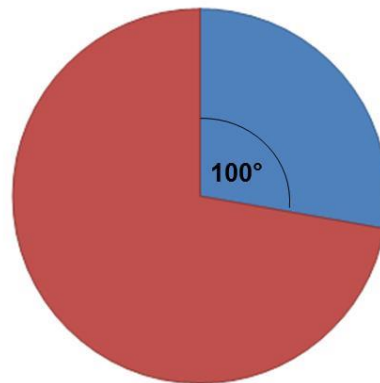
17 minutes

© White Rose Maths Hub 2016



What fraction of the pie chart is blue?

**Simplify your answer.**



$$\frac{1}{3}$$



$$\frac{100}{360}$$



$$\frac{10}{36}$$



$$\frac{5}{18}$$

© White Rose Maths Hub 2016