


1 Sam has these bread rolls to sell.



He sells 14 of the bread rolls.

How many does he have left?

2 Emma has 3 tins of paint.

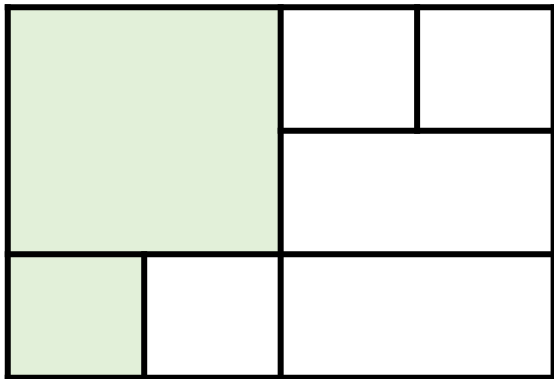
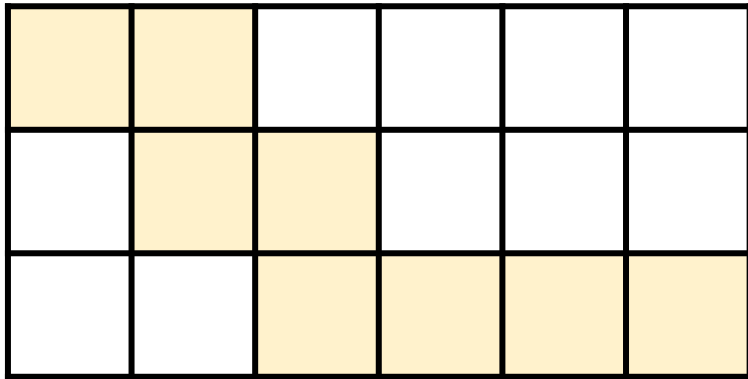


Each tin contains 5 litres of paint.

Emma uses 7 litres of paint.

How many litres of paint does Emma have left?

- 1 What fraction of each rectangle is shaded?



- 2 Work out the following fraction calculations.

(a) $\frac{3}{6} + \frac{1}{2}$

(b) $\frac{2}{5} + \frac{7}{15} + \frac{3}{5} + \frac{8}{15}$

(c) $1 - \frac{1}{5} - \frac{3}{10}$