


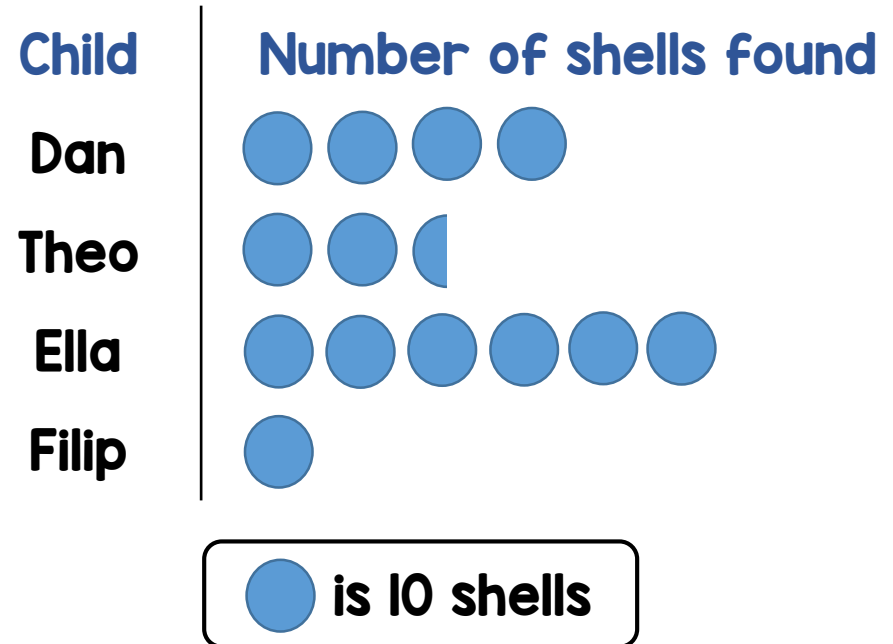
1 Mo makes some squares and triangles using lollipop sticks.



He makes 2 squares and 5 triangles.

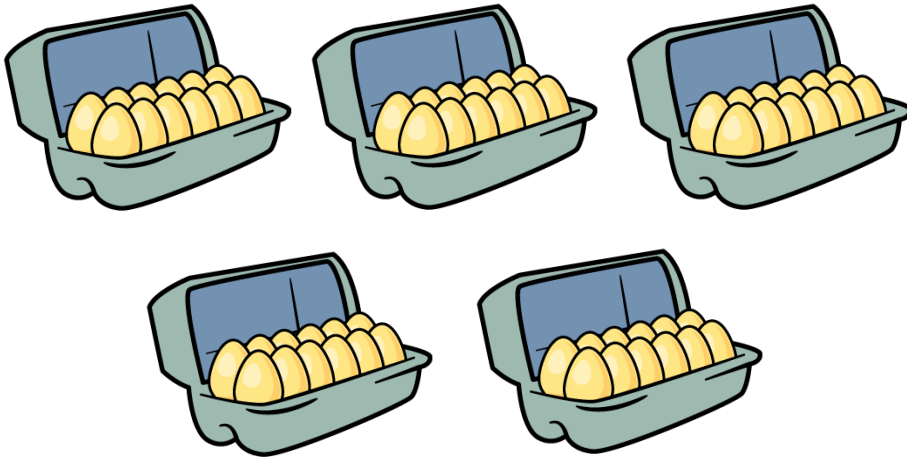
How many sticks does he use?

2 The chart shows the number of seashells found by 4 children.



How many more shells did Ella collect than Theo?

1 Maisie buys 5 boxes of eggs.



Each box contains 12 eggs.

She uses 18 of the eggs.

What fraction of the eggs does she have left?

2 Max has some bags of apples and some bags of oranges.

- There are twice as many oranges as apples in a bag.
- Max has 4 bags of apples and 3 bags of oranges.
- Max has 70 apples and oranges in total

How many oranges are in one bag?