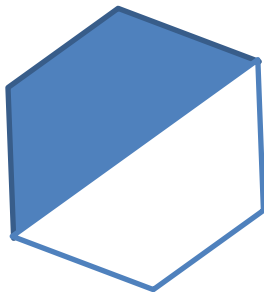
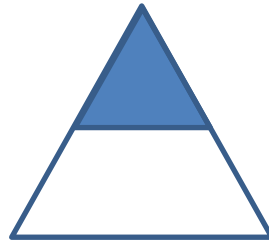



KSI Problem of the Day

Wednesday 28th March 2018

1 Which diagrams have $\frac{1}{2}$ shaded?



2 Tim has 12 more stickers than John.
John has 20 stickers less than Filip.
John has 18 stickers.



How many stickers do they have altogether?