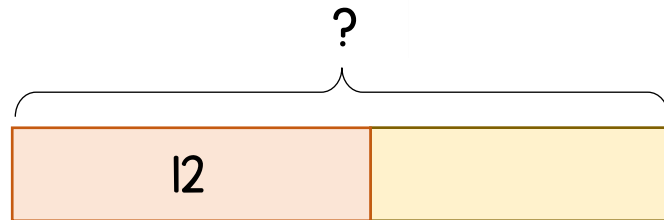
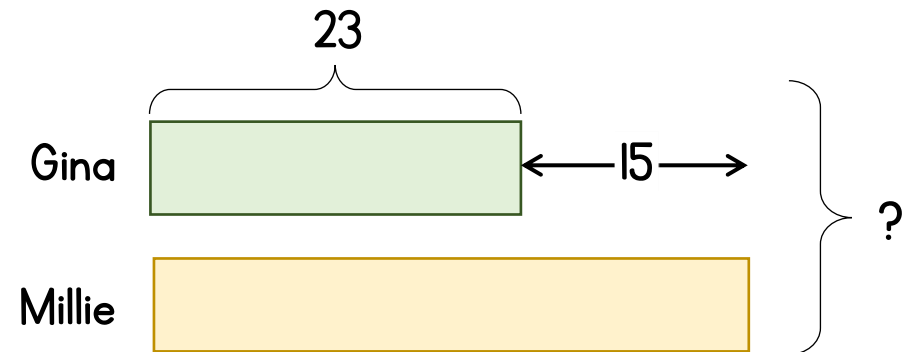


- 1** Mary has some flowers.
She gives her mum 12 flowers.
She has 9 flowers left.
How many flowers did she have at the start?



Hanna has 15 flowers.
7 of the flowers are white. The rest are red.
How many red flowers does Hanna have?

- 2** Gina has 23 strawberries.
Millie has 15 more strawberries than Gina.
How many strawberries do Gina and Millie have in total?



Gina has 23 strawberries.
This is 15 more than Millie has.
How many strawberries are there altogether?

- 1 Mary has some flowers.
She gives her mum 12 flowers.
She has 9 flowers left.
How many flowers did she have at the start?

Hanna has 15 flowers.
7 of the flowers are white. The rest are red.
How many red flowers does Hanna have?

- 2 Gina has 23 strawberries.
Millie has 15 more strawberries than Gina.
How many strawberries do Gina and Millie have in total?

Gina has 23 strawberries.
This is 15 more than Millie has.
How many strawberries are there altogether?

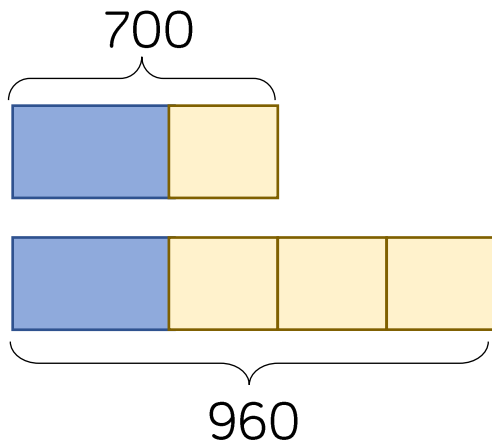
3

If

$$\triangle + \bigcirc = 700$$

$$\triangle + \bigcirc + \bigcirc + \bigcirc = 960$$

What is the value of \triangle ?



$$A + B = 60$$

$$A + A + B = 75$$

What is the value of $B - A$?

4

Jason and Kim share some money in the ratio 2 : 5

Kim spends a half of her share on a pair of sunglasses costing £40

How much money did Jason receive?

Jason



Kim



How does your answer change if Kim spent a quarter of her money on the sunglasses?

3

If

$$\triangle + \bigcirc = 700$$

$$\triangle + \bigcirc + \bigcirc + \bigcirc = 960$$

What is the value of \triangle ?

$$A + B = 60$$

$$A + A + B = 75$$

What is the value of $B - A$?

4

Jason and Kim share some money in the ratio 2 : 5

Kim spends a half of her share on a pair of sunglasses costing £40

How much money did Jason receive?

How does your answer change if Kim spent a quarter of her money on the sunglasses?

Challenge

Bernard has 130 blue and red balloons.

$\frac{2}{3}$ of the blue balloons burst.

$\frac{2}{5}$ of the red balloons burst.

There are now 36 more red balloons than blue ones

How many balloons are left in total?