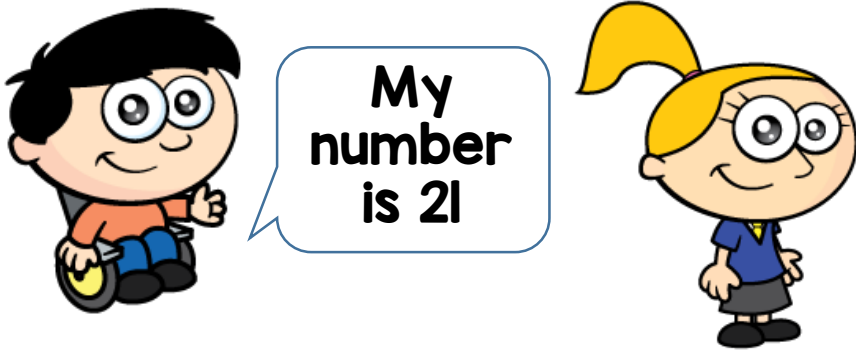


- 1 Max and Holly each think of a number.



The sum of their numbers is 50
Who is thinking of the greater number?
How much greater?

- 2 Yasmin buys 4 books.

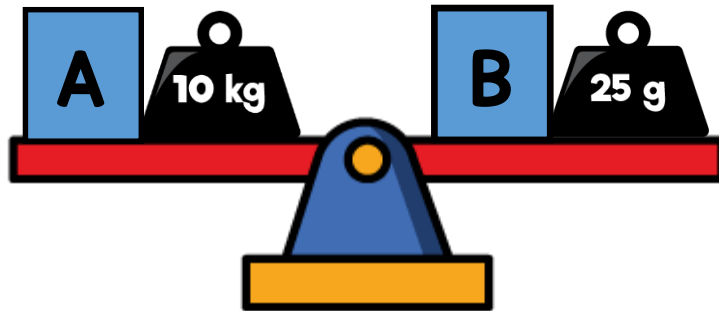


Each book costs £2

She pays with a £20 note.

How much change does she get?

1 Here are some scales.




Which is the heavier box, A or B?

Explain your answer.

2 A shop sells these fruits.



Strawberries
£2.20 per $\frac{1}{2}$ kg



Cherries
£3.50 per $\frac{1}{4}$ kg

Megan buys

- 2 kg of strawberries and
- 750 grams of cherries

How much does she spend in total?