

# KSI Problem of the Day

Tuesday 13<sup>th</sup> March 2018

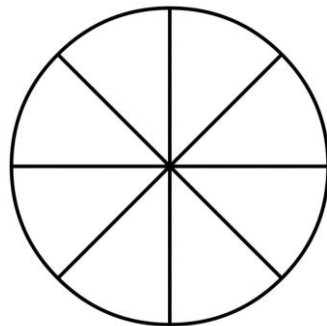

1 Complete the missing numbers

10 more than  is 37

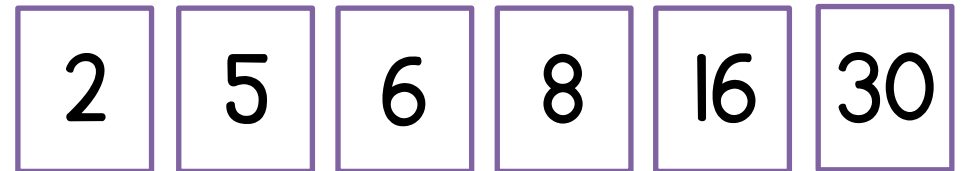
45 is  less than 58

85 is  more than  $35 + 20$

2 Shade in  $\frac{3}{4}$  of each shape.



3 The six numbers are used to make a multiplication and division sentence.



Complete the sentences.

$$\square \times \square = \square$$

$$\square \div \square = \square$$