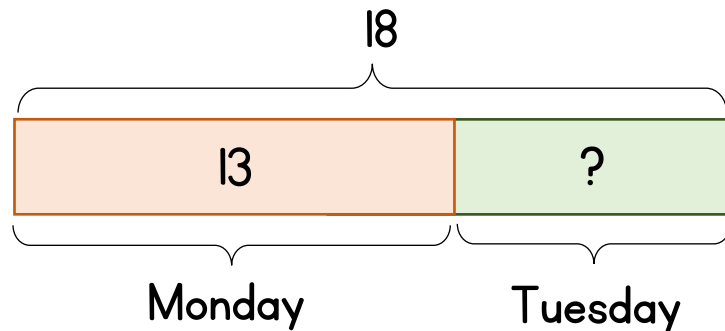
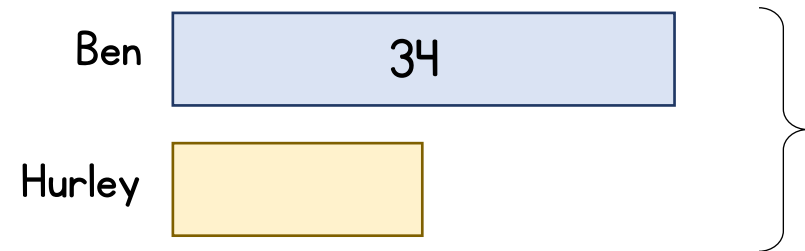


- 1 Kate has 18 eggs.
She sells 13 eggs on Monday.
She sells the rest of the eggs on Tuesday.
How many eggs does she sell on Tuesday?



How many more eggs does she sell on Monday than on Tuesday?

- 2 Ben has 34 stickers.
Hurley has 16 fewer stickers than Ben.
How many stickers do they have in total?



Ben has 68 stickers.
In total Hurley and Ben have 100 stickers.
How many more stickers does Ben have than Hurley?

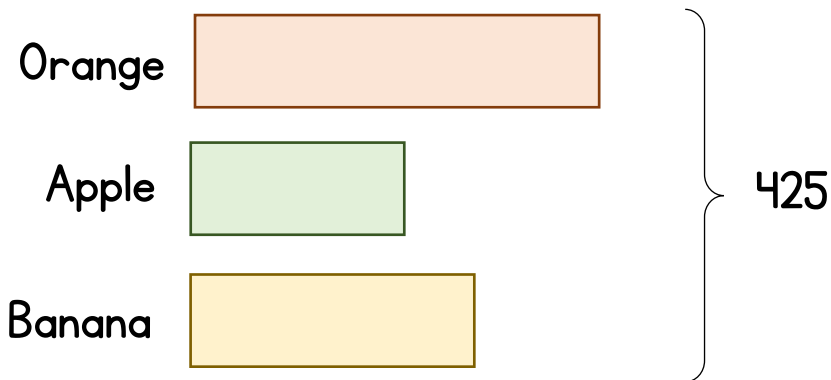
- 1 Kate has 18 eggs.
She sells 13 eggs on Monday.
She sells the rest of the eggs on Tuesday.
How many eggs does she sell on Tuesday?

How many more eggs does she sell on Monday than on Tuesday?

- 2 Ben has 34 stickers.
Hurley has 16 fewer stickers than Ben.
How many stickers do they have in total?

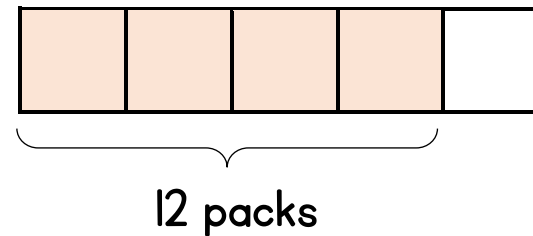
Ben has 68 stickers.
In total Hurley and Ben have 100 stickers.
How many more stickers does Ben have than Hurley?

- 3** The mass of an apple is half the mass of an orange.
The mass of a banana is 35 g more than the apple.
The total mass of the fruit is 555 g
What is the mass of the orange?



How much more does the orange weigh than the banana?

- 4** James spent $\frac{4}{5}$ of his pocket money on 12 packs of trading cards.
He wanted to buy another 12 packs of trading cards, but he was £3.60 short.
How much did 1 pack of trading cards cost?



How does your answer change if instead James spent $\frac{7}{10}$ of his pocket money on 5 packs of cards and wanted to buy 5 more packs?

3 The mass of an apple is half the mass of an orange.

The mass of a banana is 35 g more than the apple.

The total mass of the fruit is 555 g

What is the mass of the orange?

How much more does the orange weigh than the banana?

4 James spent $\frac{4}{5}$ of his pocket money on 12 packs of trading cards.

He wanted to buy another 12 packs of trading cards, but he was £3.60 short.

How much does 1 pack of trading cards cost?

How does your answer change if instead James spent $\frac{7}{10}$ of his pocket money on 5 packs of cards and wanted to buy 5 more packs?

Challenge

There are 48 more red beads than green beads in a box.

$\frac{3}{5}$ of the green beads and $\frac{1}{3}$ of the red beads are removed.

There were the same number of red and green beads removed.

How many red beads were in the box at the start?